

NAME-----Index No_____

Candidate's Signature----- CLASS-----

312/2

GEOGRAPHY

Paper 2

Time: 2 ¾ Hours

December 2021

BUNAMFAN CLUSTER EXAMINATION 2021

Kenya Certificate of Secondary Education (K.C.S.E)

GEOGRAPHY

PAPER 2

Time: 2 ¾ HRS

Instructions to candidates.

- a) Write your **name** and **Index numbers** in the spaces provided above.
- b) Sign and write the date of examinations in the spaces provided above
- c) Candidates should check the question paper has two sections **A Question 1 to 5** and **B Question 6 to 10**.
- d) Answer question **6** and any **other 2** questions in section **B**.

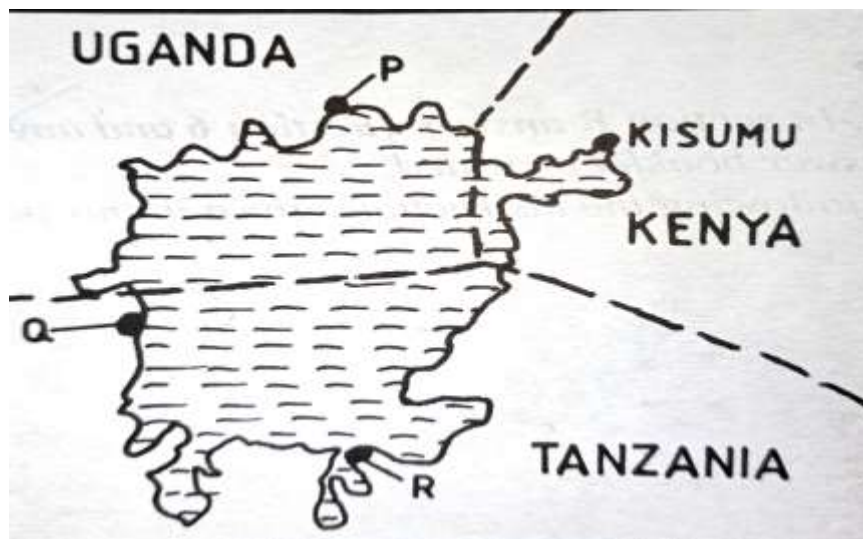
FOR EXAMINER'S USE ONLY

	QUESTION	MARKS
SECTION A	1-5	
SECTION B	6	
	7	
	8	
	9	
	10	
TOTAL SCORE. (100 %)		

SECTION A: (25 marks)

Answer ALL questions in this section.

1. a) Give three reasons why it is important to study Geography. (3 marks)
b) State two factors that may influence occurrence of minerals. (2 marks)
2. a) List two problems facing dairy farming in Kenya. (2 marks)
b) State three factors that have encouraged dairy farming in Denmark. (3 marks)
3. a) State three differences between natural forests and manmade forests. (3 marks)
b) Name any four industries associated with forestry. (2 marks)
4. Use the sketch map of Lake Victoria below to answer question (a)



- a) Name the lake ports marked **P**, **Q** and **R**. (3 marks)
- b) Outline **two** advantages of using containers while handling goods at the port of Kisumu. (2 marks)
5. a) Apart from water and air pollution, name two other types of pollution. (2 marks)
b) Identify **three** ways through which water is polluted. (3 marks)

SECTION B. (75 marks)

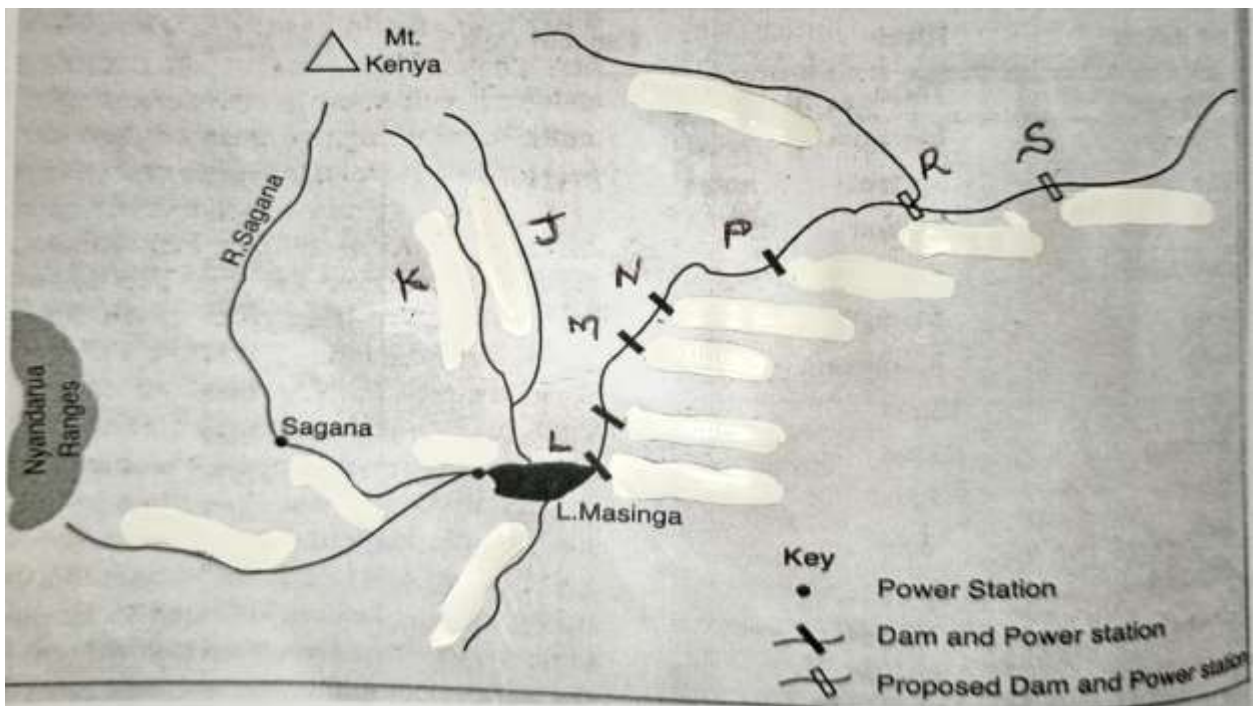
Answer **question 6** and **ANY OTHER TWO** questions.

6. The table below shows the percentage of exports of country **Y** by Commodity.

COMMODITY.	%.
Tea	47.3
Horticulture	21.6
Coffee.	18.1
Beef Products	13

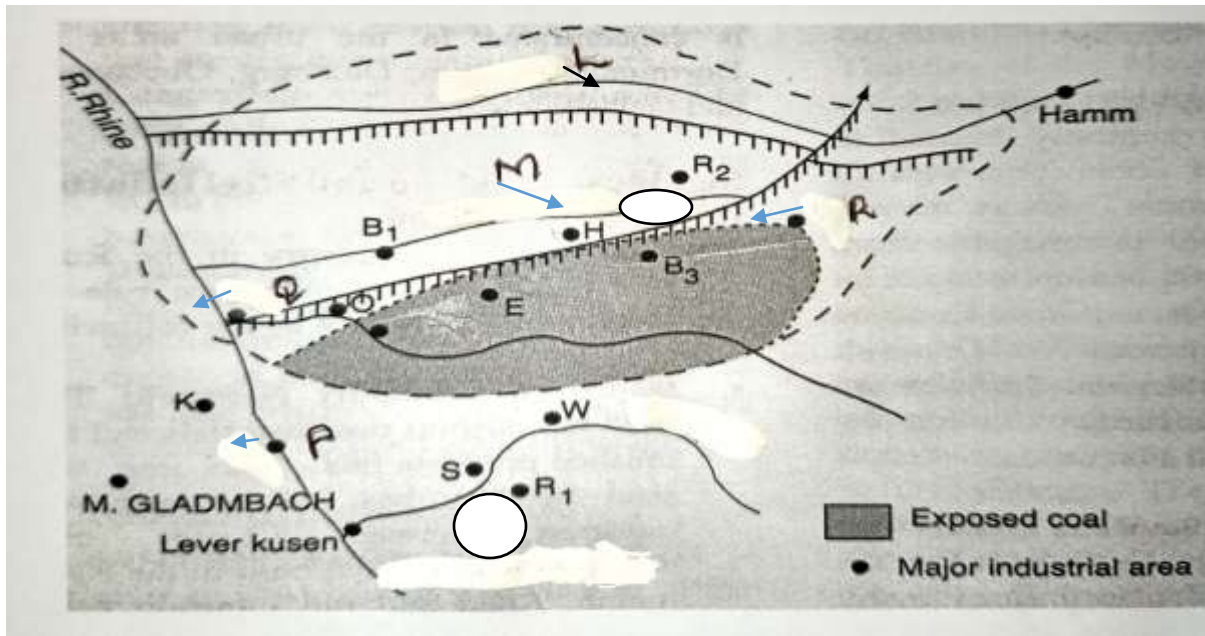
- a) Draw a divided rectangle with a length of 10 cm to represent the above data. (7 marks)
- b) Give **five** characteristics of Horticultural Farming. (5 marks)
- c) Explain **four** factors that favour beef farming in Argentina. (8 marks)
- d) Explain **three** disadvantages of Plantation Farming. (6 marks)
- 7.**
- a) i) Apart from draining swamps give two other methods through which land has been reclaimed in Kenya. (2 marks)
- ii) Give **two** methods that are used to reclaim swamps in Kenya. (2 marks)
- b) i) Name **two** rivers that supply water to the Mwea Tebere Irrigation scheme.(2 marks)
- ii) Explain how the following factors influenced the establishment of the Mwea Tebere Irrigation scheme.
- Topography. (2 marks)
 - Soils. (2 marks)
 - Population Density. (2 marks)
 - Government Policy (2 marks)

- c) i) Name three areas which make up the Zuider Zee reclamation project in the Netherlands. (3 marks)
- ii) Give **four** differences between Land Reclamation in Kenya and the Netherlands. (8 marks)
8. a) i) Define the term energy. (1 mark)
- ii) Distinguish between renewable and non-renewable sources of energy. (2 marks)
- iii) Give **three** renewable sources of energy. (3 marks)
- b) Explain three ways in which Kenya has benefited from the development of hydro-electric power station. (6 marks)
- c) Use the sketch map of the seven folk's scheme in Kenya below to answer the questions that follow.



- i) Name the river marked **J** and **K**. (2 marks)
- ii) Identify the dams marked **L**, **M**, **N** and **P**. (4 marks)
- iii) Name the proposed hydroelectric power stations labeled **R** and **S**. (2 marks)

- d) i) Give two reasons why geothermal power has not been fully exploited in Kenya. (2 marks)
- ii) State **three** causes of Energy Crisis in the world. (3 marks)
9. a) i) Distinguish between Industry and Industrial Inertia. (2 marks)
- b) Use the map below to answer the questions that follow.



- i) Name the towns **P**, **Q** and **R**. (3 marks)
- ii) Name rivers marked **L** and **M**. (2 marks)
- c) i) Apart from Iron and Steel Industries name three industries in the Ruhr Industrial region. (3 marks)
- ii) State **five** reasons why the use of coal as a source of energy in the Ruhr region declined. (5 marks)
- d) i) State **two** significance of Car and Electronic Industries in Japan. (2 marks)
- ii) Explain **three** factors which have favoured the development of car manufacturing industry in Japan. (6 marks)
- iii) Name **two** towns in Kenya where Motor Vehicle Assembling Plants are located. (2 marks)

10. a) i) Differentiate between Internal and Regional trade. (2 marks)
- ii) List **three** major exports from Kenya to European countries. (3 marks)
- b) Give **four** reasons why the southern African development cooperation (**SADC**) was formed. (4 marks)
- c) Explain **four** problems facing trade in Kenya. (8 marks)
- d) Explain how the future of International trade in Kenya can be improved. (8 marks)