



002

# COMPETENCY BASED CURRICULUM MONITORING LEARNER'S PROGRESS

4

GRADE 4 - YEAR 2023

## CREATIVE ARTS AND SOCIAL STUDIES

Time: 2hrs 15min

### READ THESE INSTRUCTIONS CAREFULLY.

- You have been given this question paper and a separate answer sheet. The question paper contains 50 questions.
- Make sure that you have written on the answer sheet.

(i) Your name

(ii) Name of your school

(iii) KNEC Assessment number

### ART AND CRAFT

- Three of the following materials are required in crayon etching **except**

- A. soap
- B. source of heat
- C. wax crayons
- D. painting brush


- The lightness or darkness of a colour is known as \_\_\_\_\_

- A. value gradation
- B. painting
- C. etching
- D. still life

- The following are methods used to decorate a pot **except**

- A. stamping
- B. scratching
- C. incising
- D. cutting

- The picture below can be used to make



- A. montage pictorial composition
- B. tonal variation
- C. modelling
- D. decoration

- Thin strips of leather that are used for threading through punched holes are known as

- A. weft
- B. thongs
- C. waft
- D. skin and hide

- In some communities basketry technique can be used to make the following items **except**

- A. barns
- B. granaries
- C. fish traps
- D. plates

- The following are things we should do when writing clear messages apart from?

- A. Keep the message short and simple
- B. Write slowly and carefully
- C. Write the letters neatly and clearly
- D. Join your words while writing

- The following materials are needed to make a simple drum **except**

- A. leather material
- B. marking tools
- C. mallets
- D. glue

- The technique of cutting out patterns on the walls of the wet clay article is called


- A. incising technique
- B. stamping
- C. impressing method
- D. embedding method

- The following are examples of messages one can create using montage technique **except**

- A. children playing football
- B. none of the above
- C. food we eat
- D. family doing house chores

### MUSIC

- The face below shows face of



- A. happiness
- B. seriousness
- C. sadness
- D. laughter


12. The line "*Let all with one accord*" is in which stanza of the Kenya National Anthem?

- A. 2
- B. 1
- C. 3
- D. 4

13. Three of the following are examples of costumes **except**

- A. sisal skirts
- B. jingles
- C. beads and necklace
- D. piano

14. The musical instrument below is played by

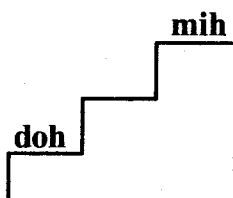


- A. shaking
- B. plucking
- C. beating
- D. hitting

15. The National flag of Kenya has got four main colours **except**

- A. black
- B. white
- C. red
- D. yellow

16. Which music note should be at the gap left?



- A. reh
- B. fah
- C. soh
- D. lah

17. The following are safety measure taken when caring for a descant recorder apart from?

- A. Keep away from heat or sun
- B. Avoid shairing before cleaning
- C. Clean after use
- D. Store without cleaning

18. Which of the following is **not** an element of music or song?

- A. Melody
- B. Message
- C. Dancers
- D. Rhythm

19. The following are feelings we get when we sing apart from?

- A. Inspired
- B. Motivated
- C. Jovial
- D. None of the above

20. What is the use of a lace in the drum

- A. for tuning
- B. fix the skin on the resonator
- C. produce sound
- D. for holding the drum while playing
- D. tablets

### SOCIAL STUDIES

21. Which one of the following is **not** a historic built environment

- A. munoments
- B. cultural centres
- C. a museum
- D. a plain

22. Which one of the following is **not** an economic activity?

- A. Water
- B. Mining
- C. Agriculture
- D. Trade

23. A ward is headed by

- A. senator
- B. member of parliament
- C. member of county assembly
- D. governor

24. How many county government are there in Kenya?

- A. 48
- B. 12
- C. 47
- D. 46

25. How many seasons do we have in a year?

- A. 8
- B. 5
- C. 4
- D. 10

26. Which one of the following cardinal points shows where the sun rises from?

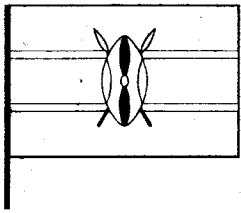
- A. West
- B. North
- C. South
- D. East

27. A drawing that shows a part of the land and the things on the land is called

- A. A compass
- B. A line
- C. map
- D. Boundary

28. Which one of the following physical features is **not** used as boundary between communities

- A. rivers
- B. mountain
- C. plain
- D. valley

29. Farmers in our county harvest their crops during the \_\_\_\_\_ season.  
 A. wet                                      B. rainy  
 C. dry                                        D. cold
30. A person who is in charge of the objects in a Museum is called  
 A. curator                                  B. guard  
 C. police                                    D. teacher
31. To rely on somebody or something for a certain thing is called  
 A. interdependence    B. depend  
 C. promote                                D. development
32. A place with many people in one area is said to be  
 A. sparsely populated  
 B. population  
 C. distribution  
 D. densely populated
33. A person who heads a county is called  
 A. ward administrator  
 B. member of county assembly  
 C. governor  
 D. senator
34. The feature shown below is called  
  
 A. flag                                        B. material  
 C. symbol                                    D. map
35. The smallest county in Kenya is  
 A. Marsabit                                B. Turkana  
 C. Nairobi                                    D. Mombasa
37. From the list given below, select one book that is **not** a gospel book?  
 A. Matthew                                B. Romans  
 C. Mark                                      D. John
38. The first man and woman to be created by God were \_\_\_\_\_  
 A. Adam and Eve  
 B. Shem and Seth  
 C. Adam and Sarah  
 D. Abraham and Rebecca
39. We should always \_\_\_\_\_ our parents and elders  
 A. obey                                      B. disobey  
 C. envy                                        D. abuse
40. Moses was looking after \_\_\_\_\_ when he saw the burning bush?  
 A. sheep                                      B. cattle  
 C. goats                                      D. donkey
41. Who among the following prophets healed Naaman from a bad disease?  
 A. Elijah                                    B. Jesus  
 C. Jeremiah                                D. Elisha
42. Shadrack, Meshack and Abednego were saved from the fire by the \_\_\_\_\_  
 A. king                                        B. pharisees  
 C. angel                                        D. lucifer
43. In which of the following towns did Jesus grow up in?  
 A. Galilee                                    B. Bethlehem  
 C. Nazareth                                D. Ninevah
44. After Jesus had fed the 5000 men with five loaves of bread and two fish. Some bread was left. How many baskets were left?  
 A. 2    B. 5  
 C. 14    D. 12
45. \_\_\_\_\_ walked on water and did not sink.  
 A. Peter                                      B. Andrew  
 C. John                                        D. Judah
46. When you wrong someone, you should say  
 A. Thank you                                B. Welcome  
 C. Sorry                                        D. Good

**PART 11**

**CHRISTIAN RELIGIOUS EDUCATION**

36. State one way in which your class can conserve the environment around your school?  
 A. Cutting down trees  
 B. Burning charcoal  
 C. Planting trees  
 D. Scattering rubbish

47. The prayer that Jesus taught His disciples is called  
 A. The apostle's creed  
 B. The Novena  
 C. The Lord's prayer  
 D. The Last supper
48. Three of the following are websites and applications that we use to communicate with others on digital devices. Which one is **not**?  
 A. WhatsApp                      B. Facebook  
 C. YouTube                         D. Exercise books
49. Which one of the following is **not** a fruit of the Holy Spirit?  
 A. Wisdom                         B. Joy  
 C. Patience                        D. Peace
50. \_\_\_\_\_ and \_\_\_\_\_ lied the Holy Spirit?  
 A. Ananias and Sapphira  
 B. Peter and John  
 C. Ananias and Sarah  
 D. Orpha and Ruth
- PART 11**  
**ISLAMIC RELIGIOUS EDUCATION**
36. Identify two Surah's of protection in Islam  
 A. Naas and Ikhlas                B. Fatiha and Falaq  
 C. Ikhlas and Asr                 D. Naas and Falaq
37. Identify attributes of Allah mentioned in Surah Al-Fatihja  
 A. Al-Qudus                         B. Al-Malik  
 C. Al-Jabbar                         D. As-swamad
38. Which one of the following is **not** among the etiquettes of eating according to Islam?  
 A. Washing hands  
 B. Saying Bismillah  
 C. Taking unnecessary  
 D. Eating while mouth closed
39. Which of the following is an example of Najasatul Mughalladhah?  
 A. Cow                                B. Pig  
 C. Cat                                 D. Donkey
40. The state of being pure is called?  
 A. Twahara                         B. Najis  
 C. Wudhu                            D. Nikah
41. The third pillar of Islam is?  
 A. Hajj                                B. Saum  
 C. Zakati                             D. Swalah
42. We fast during ramadhan for?  
 A. 23                                 B. 27  
 C. 31                                 D. 29
43. The following are characters of prophets Muhammad. Which one is **not**?  
 A. Kind                                B. Trustworthy  
 C. Hypocrite                        D. Generous
44. Grade Four learners gave out the meaning of the attributes of Allah (SWT). Which one among them has the **correct** meaning?  
 A. Ar-Rahman - The most merciful  
 B. Al-Malik - The forgiver  
 C. Al-Khaliq - The creator  
 D. Al-Quddus - Knowledgeable
45. Prophet Muhammad during his early life he worked as a shepherd for?  
 A. Abu-lahab                        B. Abu-Jahal  
 C. Abu-Twalib                       D. Abu-Sufiyan
46. Saalim saw Ali sneezing, Salim should say?  
 A. Al-hamdullillah                B. Bismillah  
 C. Yarhamukallah                 D. Yahdiikumullah
47. Quran is a book revealed to prophet Muhammad while Zabur was revealed to  
 A. David                                B. Issa  
 C. Musa                                D. Ibrahim
48. Smiling to a friend is?  
 A. Crime                                B. Selfishness  
 C. Sadaqa                             D. Kindness
49. Who was the foster Mother of the Prophet Muhammad?  
 A. Amina                                B. Aisha  
 C. Khadijah                         D. Halima
50. Which one of the following Angels of Allah is known as the angel of revelation  
 A. Jibril                                B. Mikail  
 C. Atid                                 D. Malik