


KENYA PRIVATE SCHOOLS ASSOCIATION



STD.8 END - TERM 2 - 2022

SOCIAL STUDIES

Time: 2 Hours 15mins

READ THESE INSTRUCTIONS CAREFULLY

1. You have been given this question booklet and a separate answer sheet. The question booklet contains 50 questions.
2. Do any necessary rough work in this booklet.
3. When you have chosen your answer, mark it on the ANSWER SHEET, not in this question booklet.

HOW TO USE THE ANSWER SHEET

4. Use only an ordinary pencil.
5. Make sure that you have written on the answer sheet:

YOUR INDEX NUMBER
YOUR NAME
NAME OF YOUR SCHOOL
6. By drawing a dark line inside the correct numbered boxes, mark your full Index Number (i.e. School Code Number and three-figure Index Number) in the grid near the top of the answer sheet.
7. Do not make any marks outside the boxes.
8. Keep your answer sheet as clean as possible and **DO NOT FOLD IT**.
9. For each of the questions 1-90 four answers are given. The answers are lettered A, B, C, D. In each case only **ONE** of the four answers is correct. Choose the correct answer.
10. On the answer sheet, show the correct answer by drawing a line in the box in which the letter you have chosen is written.

Example

In the **Question Booklet**:

62. Who among the following people was the father of Jacob and Esau?

- A. Isaac
- B. Laban
- C. Bethel
- D. Enoch

The correct answer is A

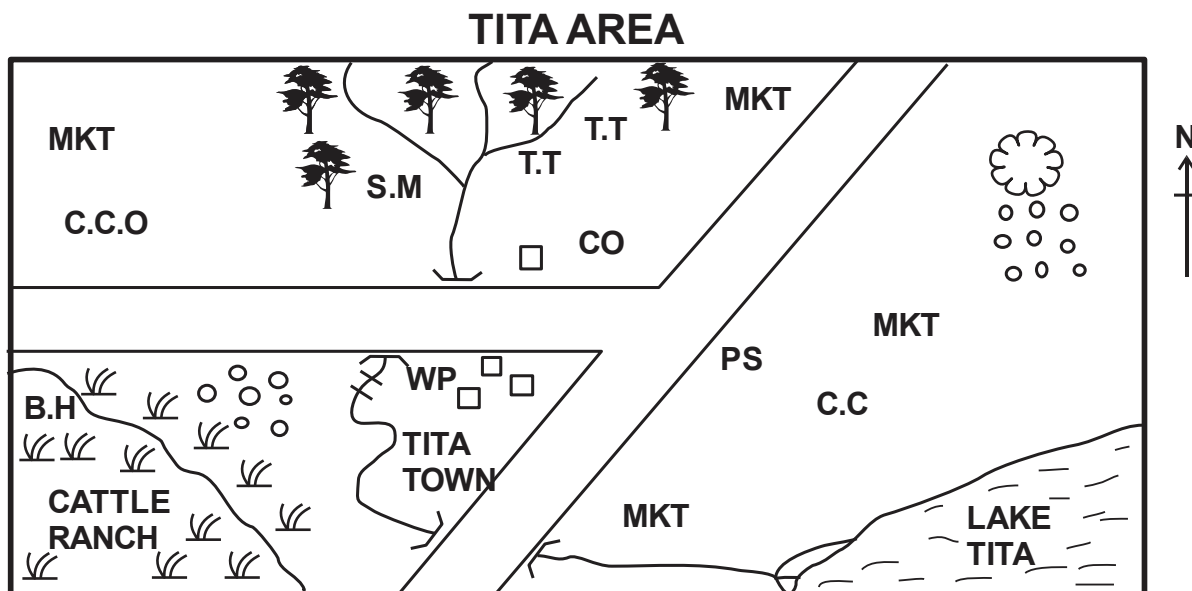
On the **Answer Sheet**:

61. [A] [B] [C] [D] 62. [**A**] [B] [C] [D] 63. [A] [B] [C] [D] 64. [A] [B] [C] [D]

In the set of boxes numbered 62 the box with A printed in it is lined.

11. Your line **MUST** be within the box. Make your line as **DARK** as possible.
12. For each question, **ONLY ONE** box is to be lined in each set of four boxes.

Study the map of TITA AREA and answer questions 1 - 7



KEY

Scale 0 1 2 3 4 5 6 7 8 9 10 km

- | | | |
|---------------------------|-------------------------|---|
| C.P County offices | oo Settlement | C.C.O County commissioner office |
| W.P Water pump | T.T Tea | B.H Borehole |
| Quarry | C.C Chief's camp | S.M Saw mill |
| Grass | MKT Market | P.S Police station |

- Traders in Tita area get their trading licenses from the:
 - County offices
 - Chiefs office
 - Market
 - County Commissioner's office
- Residents of Tita town get their water from?
 - Borehole
 - Water pump
 - River
 - Lake
- What type of settlement is found in Tita area?
 - Linear
 - Sparse
 - Dense
 - Clustered
- What is the main economic activity carried out in Tita area?
 - Lumbering
 - Cash crop farming
 - Cattle keeping
 - Trading
- What factor might have favoured the establishment of the cattle ranch?
 - Security
 - availability of space
 - availability of market
 - availability of good transport
- Tita town has mainly grown due to:
 - road junction.
 - availability of water.
 - availability of security.
 - administrative structures.
- What climate is experienced in the South West of Tita area?
 - Cool and wet
 - Cool and dry
 - Hot and dry
 - Hot and wet
- What was the main economic of the Cushites during the pre-colonial period?
 - Trading
 - Cultivation
 - Iron smelting
 - Livestock keeping
- What mainly led to the migration of the Ngoni from South Africa?
 - Need for fertile land for farming.
 - Hostility of their neighbours.
 - Need for pasture for their animals.
 - Need to adventure.
- Who among the following was Akamba traditional leader?
 - Koitale Arap Samoei
 - Meatilili wa Menza
 - Masaku
 - Nabongo Mumia
- Which one of the following is the main crop grown at Perkerra irrigation scheme?
 - seed maize
 - rice
 - potatoes
 - cotton

12. Which one of the following pre-historic sites correctly matches with the country where it is found?

Prehistoric site	Country
A. Isimila	Uganda
B. Olorgesailie	Tanzania
C. Gambles Cave	Kenya
D. Ntusi	Ethiopia

13. Mangrove forest are protected mainly to:
- Protect the rare species of trees.
 - Protect the source of rivers.
 - Protect the ocean from drying-up.
 - Protect the home of wild animals.
14. Which mineral is used in making water pipes, coins and television screens?
- Gold
 - Soda ash
 - Copper
 - Petroleum
15. Three of the following species of fish are kept in the fish farms in Kenya, which one is NOT?
- Tuna
 - Tilapia
 - Copper
 - Mudfish
16. Which one of the following statements is not true about horticultural farming in the Netherlands?
- Farming is intensive.
 - There is adequate capital.
 - There is less mechanization.
 - It is carried out throughout the year.
17. Three of the following statements are true about settler farming in Kenya. Which one is NOT?
- it was mainly small scale.
 - cash crops were grown.
 - depended on African labour.
 - Machines were used.
18. What is inheritance?
- document showing how the property of the deceased should be shared.
 - Property or money received from the deceased.
 - document showing how the property of the deceased should be managed.
 - property left by the deceased.
19. Which one of the following correctly describes the population structure of Germany?
- Consists mainly of the young people.
 - there is high birth rate.
 - majority of the people live in towns.
 - there is high population growth rate.
20. Which policy was used by the French in Senegal?
- Assimilation
 - direct rule
 - Indirect rule
 - Paternalism

21. Which one of the following is a service industry?
- Leather tanning
 - Banking
 - Shoe making
 - Paint making
22. Three of the following are the objectives of the African Union (AU). Which one is not?
- To promote good governance.
 - To promote greater economic co-operation.
 - To liberate African countries from colonialism
 - To promote respect to human rights.
23. Which one of the following statements shows the similarity between the government of Kenya and Swaziland?
- both countries are ruled by presidents.
 - both the king and the president are elected by people.
 - both have two houses of parliament.
 - both have many political parties .
24. Below is a description of a certain climate.
- Has a low temperature range.
 - Receives high convectional rainfall.
 - It is hot and wet
 - Has two rainfall maximas.
- Which climate is described?
- Savanna climate
 - Mediterranean climate
 - Mountain climate
 - Equatorial climate
25. Below is a description of a certain African prominent leader:
- He led his country to independence.
 - He fought in the 2nd world war.
 - He was a great poet.
 - He promoted democracy by allowing formation of many political parties in his country.
 - Founder member of OAU.
- Who is the leader described?
- Leopold Sedar Seghor
 - Gamal Abdel Nasser
 - Dr. Kwame Nkurumah
 - Nelson Mandera
26. The freedom fighters in Ghana used the following methods to fight for independence except one. Which one is it
- Boycotts
 - Strikes
 - Peaceful demonstrations
 - guerrilla warfare.
27. Three of the following are reasons why Europeans scrambled for colonies in Africa. Which one is not?
- To get raw materials for their industries.
 - To get more slaves.
 - To look for markets for their goods.
 - To spread christianity.

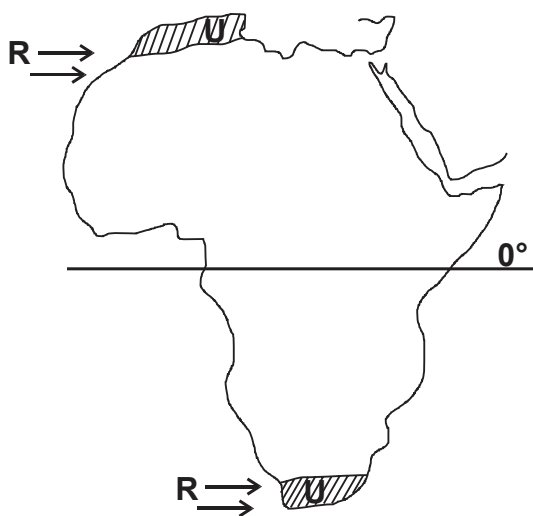
28. Which one of the following countries was colonised by the french?
 A. Madagascar B. Namibia
 C. Angola D. Ghana

29. Who among the following resisted the Europeans?
 A. Nabongo Mumia
 B. Lewanika
 C. Waiyaki wa Hinga
 D. Samori Toure

30. Which one of the following statements is not true about the Kingdom of Old Ghana?
 A. It was ruled by hereditary Kings.
 B. Mainly prospered due to long distance trade.
 C. Collapsed due to attack by the Almoravids.
 D. The king was succeeded by his nephew.

31. Highland areas are densely populated mainly due to:
 A. favourable climate.
 B. availability of good means of transport.
 C. availability of many industries.
 D. availability of security.

Use the map to answer questions 32 - 34



32. The latitude marked 0° passes through the following countries except one. Which one is it?
 A. Gabon B. DRC
 C. Algeria D. Somalia
33. Which are the winds marked R?
 A. Harmattan winds
 B. Westerly winds
 C. South East monsoon winds
 D. North East trade winds
34. Which one of the following statements is true about the climatic region marked U?
 A. has hot and wet summer.
 B. winters are cool and wet.
 C. affected by the hot and Harmattan winds.
 D. winters are cool and dry

35. Which one of the following tourist attractions correctly matches with the country where it's found?

Tourist attraction	Country
A. Pyramids	Zimbabwe
B. Kruger National park	South Africa
C. Atlas Mountains	Mauritius
D. Robben Island	Kenya

36. What is the main contribution of tourism?
 A. Earns foreign exchange.
 B. Creates employment.
 C. Promotes agriculture.
 D. Promotes development of infrastructure.

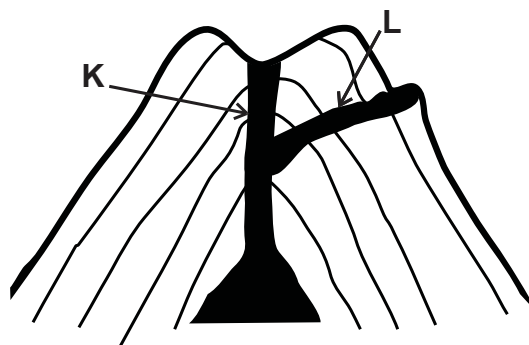
37. Which one of the following means of transport is used to transport bulky goods over long distances on land?
 A. Water transport B. Air transport
 C. Railway transport D. Road transport

38. What is the main problem facing Marine fishing in Kenya?
 A. Lack of adequate capital to purchase the equipment.
 B. Poor means of transport.
 C. Water pollution
 D. Presence of water hyacinth

39. Which one of the following factors is likely to cause disunity?
 A. dialogue
 B. Tolerance
 C. Transparency and accountability
 D. Favourism

40. Who among the following is a member of parliament?
 A. Senator B. Cabinet secretary
 C. Attorney General D. Chief Justice

Use the diagram below to answer questions 41 - 43



41. Which one of the following statements is true about the above diagram?
 A. it was formed through downwarping process.
 B. most mountains in Africa were formed through the above process.
 C. it was formed through folding process.
 D. it was formed through erosion.

42. Which are the parts K and L respectively?
 A. vent and dyke
 B. dyke and crater
 C. pipe and magma
 D. dyke and lava
43. Three of the following physical features was formed through the process shown?
 A. L. Victoria B. L. Nakuru
 C. Mt. Moroto D. Mt. Pare
44. Which is the highest court in Kenya?
 A. Supreme court
 B. Chief magistrate court
 C. Court of Appeal
 D. High Court
45. Which one of the following is not the function of Judiciary?
 A. Solves disputes.
 B. Upholds the constitution.
 C. Punishes the law breakers.
 D. Rehabilitates the convicted criminals.
46. The speaker of the senate is:
 A. elected by the people.
 B. nominated by the political parties.
 C. elected by the members of the senate.
 D. appointed by the Judicial service commission.
47. The National government mainly gets its revenue from:
 A. sale of bonds B. Court fines
 C. Taxes D. School fees
48. Most accidents on Kenyan roads are caused by the:
 A. carelessness of the road users.
 B. driving under the influence of alcohol.
 C. poor weather conditions.
 D. poor roads.
49. The common market of Eastern and Southern Africa was established mainly to:
 A. to promote infrastructure.
 B. to reduce unnecessary competition.
 C. to promote transport and communication.
 D. to promote trade.
50. Which is the best method of preserving fish in the deep sea?
 A. Sundrying B. Canning
 C. Freezing D. Smoking
51. Dams in Africa are mainly faced by the problem of:
 A. waterborne diseases
 B. siltation
 C. displacement of people
 D. low volume of water
52. Maize in Kenya and Tanzania is mainly grown for:
 A. home use B. export
 C. making oil D. feeding animals
53. Which one of the following areas is sparsely populated?
 A. Coastal plains B. Kenyan highlands
 C. Marsabit D. Lake Victoria Basin
54. Which one of the following is a man-made lake?
 A. L. Tana B. L. Kivu
 C. L. Volta D. L. Kyoga
55. Isolated hills on plateaus that have resisted erosion are called:
 A. Barchans B. Inselbergs
 C. Oasis D. depressions
56. A good Kenya citizen should do the following except one. Which one is it?
 A. Evades taxes
 B. Obeys the law
 C. be loyal to the government
 D. conserves the environment
57. In which year did Kenya become a republic?
 A. 1963 B. 1964 C. 1920 D. 1895
58. Which one of the following towns grew as a result of trading activities?
 A. Nakuru B. Eldoret
 C. Mombasa D. Thika
59. Which one of the following is an electronic means of communication?
 A. Newspaper B. Magazines
 C. Journals D. Radio
60. Which town is the main inland port of Kenya?
 A. Nakuru B. Kisumu
 C. Mombasa D. Nairobi
- CHRISTIAN RELIGIOUS EDUCATION**
61. Adam and Eve were chased out of the garden of Eden according to the story of human disobedience in Genesis 3 : What punishment was given to the man
 A. crawl on his belly
 B. pain during child birth
 C. toil hard all his life
 D. always eat dust
62. God made promises to Abraham. Which was not one of the following was not one of the promises?
 A. God would bless Abraham
 B. A blessing to those who cursed him
 C. A curse to those who cursed him
 D. His name would be famous
63. While in prison Joseph was put in charge of other prisoners because
 A. He was faithful
 B. He was successful
 C. He interpreted dreams better
 D. He was hardworking.

64. During the sealing of the covenant, Moses dedicated the Israelites to God by
 A. giving them the ten commandments.
 B. sacrificing the lamb without blemish
 C. sprinkling blood on them
 D. giving them manna and quails.
65. Moses performed ten miracles before the release of the Israelites from Egypt. Which among the following is a lesson learnt about the attribute of God in the events?
 A. He is powerful B. He is a protector
 C. He is a saviour D. He is tolerant
66. Both King Ahab and King David broke the following commandments. Which is it?
 A. 4th B. 5th
 C. 10th D. 7th
67. What is the main reason why the Israelites demanded for king?
 A. to have a King they can see
 B. to be like other nations
 C. to be palace soldiers
 D. to become
68. Prophet Zachariah prophesied one of the following prophesies. Which one is it?
 A. Jesus triumphant entry in Jerusalem
 B. Bethlem the birth place of Jesus
 C. Jesus being born of a virgin
 D. Jesus being a refugee in Egypt.
69. Jeremiah was called by God when still young according to Jeremiah 1 : 5. We learn all the following from Jeremiah's call except?
 A. we should spread the gospel
 B. we should do God's will
 C. be resistant to work for God when young
 D. be ready to serve at all times
70. When Joseph and Mary took Jesus for presentation in the temple, Simeon said the following words about Baby Jesus except, he would
 A. be the light to the gentiles
 B. bring glory to the people of Israel
 C. being salvation for all the people
 D. bring good news to the poor.
71. Jesus agreed to go back with his parents after he had been let in the temple during the Passover. What lesson do we learn from this
 A. we should be ready to follow Christ
 B. children should challenge the clergy
 C. children should obey their parents.
 D. children should run away from home
72. 'This is my own dear son with whom I am pleased, listen to Him.' These words were said during the following events. Which is it?
 A. baptism B. transfiguration
 C. temptation D. crucification
73. In the parable of the sower the seeds that fell on the thorns represents the following people. Who are they?
 A. people who love riches and desires of the world
 B. people who accept the word and bear fruit.
 C. people who hear the word but Satan takes it away
 D. people who give up at once when persecution comes.
74. The teaching of Jesus about anger emphasize that Christians should
 A. love their enemies
 B. do good actions as they are role models
 C. serve one master at a time
 D. reconcile with those who wrong them.
75. All the miracles of Jesus show that 'He was universal saviour except one'. Which is it?
 A. healing of the Canaanite girl
 B. healing of the paralysed man
 C. healing of the ten lepers
 D. healing of the centurion servant
76. Jesus forgave the adulterous woman brought to him by Pharisees and the teachers of law. The main lesson Christians learn from this story is that
 A. we should live holy lives.
 B. Jesus is the giver of life giving water.
 C. we should humble ourselves
 D. we should treat each other equally
77. 'Take it and eat it, this is my body' Mark 14 : 22. These words were said by Jesus during which event?
 A. transfiguration B. baptism
 C. last supper D. Passover
78. In the early church the disciples decided to send financial help to their fellow believers in Judea through the following people. Who are they
 A. Agabus and Barnabas
 B. Saul and Philip
 C. Saul and Barnabas
 D. Phillip and Mathias
79. Philip was able to explain the scripture to the Ethiopian Eunuch because he had the following gift of the Holy spirit. Identify it
 A. interpreting tongues
 B. preaching
 C. wisdom
 D. speaking in tongues.
80. Paul wrote the following books of the New Testament except
 A. Titus B. Galatians
 Jude James
 Ephesians Romans
 C. James D. Colossians
 1st Peter John
 1st John Mark

81. I was led by the Holy spirit to the house of Judas to pray for Saul. Whom am I?
A. Ananias B. Silas
C. Timothy D. Peter
82. Initiation in the Traditional African Society is similar to the following practice in Christianity. Which is it?
A. marriage B. baptism
C. confirmation D. confession
83. The main reason why marriage was important in the traditional society is
A. for companionship
B. to raise the social status
C. to pay dowry
D. for procreation
84. In the traditional African society initiates were secluded from the community mainly to
A. be taught clan secrets
B. be taught responsible adult behaviours.
C. be taught how to protect the community
D. be taught about morals
85. The traditional African communities reconciled with God through the following means except
A. giving tithes
B. offering sacrifices
C. praying
D. confession
86. The following are reasons why people work. Which one is not?
A. to earn a living
B. meet basic needs
C. please others
D. develop talents
87. Class 7 pupils were asked ways of enabling authorities to perform their duties effectively. Who among the following pupils gave the best answer.
A. Ann: paying taxes
B. Ben: receiving tribute
C. Jane : helping tribesmates
D. Vesh: supporting injustice
88. All the following are effects of misuse of leisure except one. Which is it?
A. encouraging youth in crime
B. unwanted pregnancies
C. nurturing skills
D. engaging in drug abuse
89. Msecha your classmate has a habit of abusing classmates from other tribes. As a Christian what is the best action to take?
A. introduce more words for abuse
B. report him to the chief
C. advise him to stop and ask for forgiveness
D. beat him up as a gang.

90. Which is the best way for the wealthy people to use their extra riches.
A. throw a party for street children.
B. save the money for a rainy day
C. travel to Dubai for a holiday
D. create jobs for people with special needs.

ISLAMIC RELIGIOUS EDUCATION

61. We learn about the revelation of Quran is suratul
A. Alaq B. Main
C. Qadar D. Fatiha
62. Which of the following Surah talks about an earthquake that will take place on the day of judgement
A. Al Bayyinah B. Alzizalah
C. Al Adiyat D. Al Qadr
63. Prophet Muhammad's name is raised high according to surah inshirah. This status is realize in all the following except
A. Adhan B. Shahada
C. tashah-hud D. Takbir
64. Which of the following items should not be left near a mantadhar?
A. Fragrance flowers
B. White garments
C. Wood carvings
D. Torch
65. Which statement is not correct about the Kafan (shrouding)
A. It can be bought by inheritors.
B. it can be bought from the inheritance
C. it can be set ready by the deceased.
D. it can only be bought after one has died.
66. All the activities are associated with Lailtul Qadr except
A. Reciting the Quran.
B. Making dua.
C. Remembering life and times of prophet (SAW).
D. Maintaining contincious adhkar.
67. The following names refers to the Al Kaaba except?
A. Bait - ul - Ilah B. Bail - ul - Haraam
C. Bait - ul - Atiq D. Bait - ul - Muqudis
68. The first revelation to prophet Muhammad (SAW) found him in
A. business B. fasting
C. meditation D. preaching
69. It is important to let seritints know how much they would be working for before embarking to word mainly because
A. it its an act of justice.
B. work is a never ending exercise.
C. it builds confidence in them.
D. if payment is reduced they can complain.

70. Which of the following should not be allowed in an Islamic wedding ceremony?
 A. overnight merry making.
 B. exchange of rings.
 C. After nikkah feast.
 D. Mahr announcement.
71. Hija was a milestone in Islam mainly because it
 A. Reduced conflict between Muslims and the Quraish.
 B. Ensured survival of Islam.
 C. Made the Quraish respect the status of the prophet.
 D. Secured safety of many makkah immigrants.
72. Which of the following attributes of Allah (SWT) means the opener.
 A. Al Khaliq B. Al Tatah
 C. Al Fatah D. Al Aleem
73. As a Muslim, what should you do if you find a christian fighting a fellow Muslim
 A. Join in the fight
 B. Report to the police
 C. Stop them immediately
 D. applaud the winner
74. What do we refer to cleaning one after toileting
 A. Ghusul B. Wudhu
 C. Tayamum D. Istinjai
75. You can reduce spread of the pandemic of corona virus by _____
 A. hugging people
 B. wearing facemask
 C. visiting crowded places
 D. spitting everywhere
76. Nabii Yusuf refused to sleep with the wife of Potiphar. Which is the reason he refused
 A. Yusuf was faithful to his wife.
 B. Yusuf feared Alla.
 C. Yusuf feared what people would say.
 D. Yusuf remembered favours of Potiphar.
77. The two haraam things for men to wear in are.
 A. gold and silver B. gold and bronze
 C. gold and silk D. silk and bronze
78. What is halaal or haraam is determined by
 A. Allah only B. The prophet
 C. Ulama D. The Angels
79. Complete the following hadith.
 "Virtue is _____ conduct and sin is that which _____ your heart."
 A. good, pleases B. good, punches
 C. good, spoils D. bad, destroys
80. Who accompanied prophet Muhammad (SAW) during Hijra?
 A. Jibril B. Buraq
 C. Zaid D. Abubakar
81. Aqiqah is _____
 A. birthday of a baby.
 B. slaughtering a goat for a baby.
 C. saying Adhan for a baby.
 D. Giving the baby a good name.
82. How old was the prophet (SAW) when he married Khadijah (R.A)
 A. 40 B. 25 C. 63 D. 53
83. The following are positive significances of the tongue which one is not
 A. Educate others
 B. Advocate for injustice
 C. Read the Quran
 D. Speak the truth
84. Which of the following intoxicants is referred to as the mother of al evil
 A. Alcohol B. Bhang
 C. Cocaine D. Cigarette
85. Fauzia beat up her friend for no reason she later apologized to her friends. Her friend should
 A. Beat her up as well.
 B. Report to the teacher.
 C. Stop her friendship.
 D. forgive her.
86. Which is not correct about Swalatul witr
 A. it is made up of an odd number of raka.
 B. it is the last prayer said at night.
 C. it has a maximum of eight rakaa.
 D. The last rakaa is normally one.
87. All the prophets of Allah were "Masumeen" This means that they _____
 A. were protested from sins.
 B. performed miracles.
 C. had alot of patience.
 D. were well educated
88. Which miracle was given to Nabii Swaleh (AS)
 A. camel B. stick
 C. heal the sick D. bend iron
89. Honouring and welcoming a guest is a sign of _____
 A. Belief in Angels.
 B. Belief in Books.
 C. Belief in prophets.
 D. Belief in the last day.
90. One of the following is not important before swalah. Which one
 A. ensuring cleanliness.
 B. Time for swalah
 C. Face the Qrbla
 D. Wearing kanzu